

# CENTRAL ACADEMY NO. 2

## KHETRI NAGAR

Affiliated with CBSE, Affiliation No. 1730154

Pre- Primary Section of Central Academy

Session: 2018 - 2019

---

Name:..... Class: K.G. Subject:Maths Date: .....

Q.1. Count and write the number



\_\_\_\_\_



\_\_\_\_\_



\_\_\_\_\_

Q.2. Write the numbers from 6 to 10

---

Q.3. Count and match



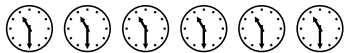
3



2



7



4



6

Q.4. Write the numbers that come before.

1. \_\_\_\_\_ 6

2. \_\_\_\_\_ 3

3. \_\_\_\_\_ 9

4. \_\_\_\_\_ 5

Q.5. Write the number that come after.

1. 9 \_\_\_\_\_

2. 7 \_\_\_\_\_

3. 3 \_\_\_\_\_

4. 8 \_\_\_\_\_

Q.6. Match the following

6

9

3

5

9

7

7

3

5


6

Q.7. Write the numbers in the correct order.


15, 9, 3, 18, 7, 11, 4, 16, 13

\_\_\_\_\_

Q.8. Count and circle the correct answer



15, 8, 7

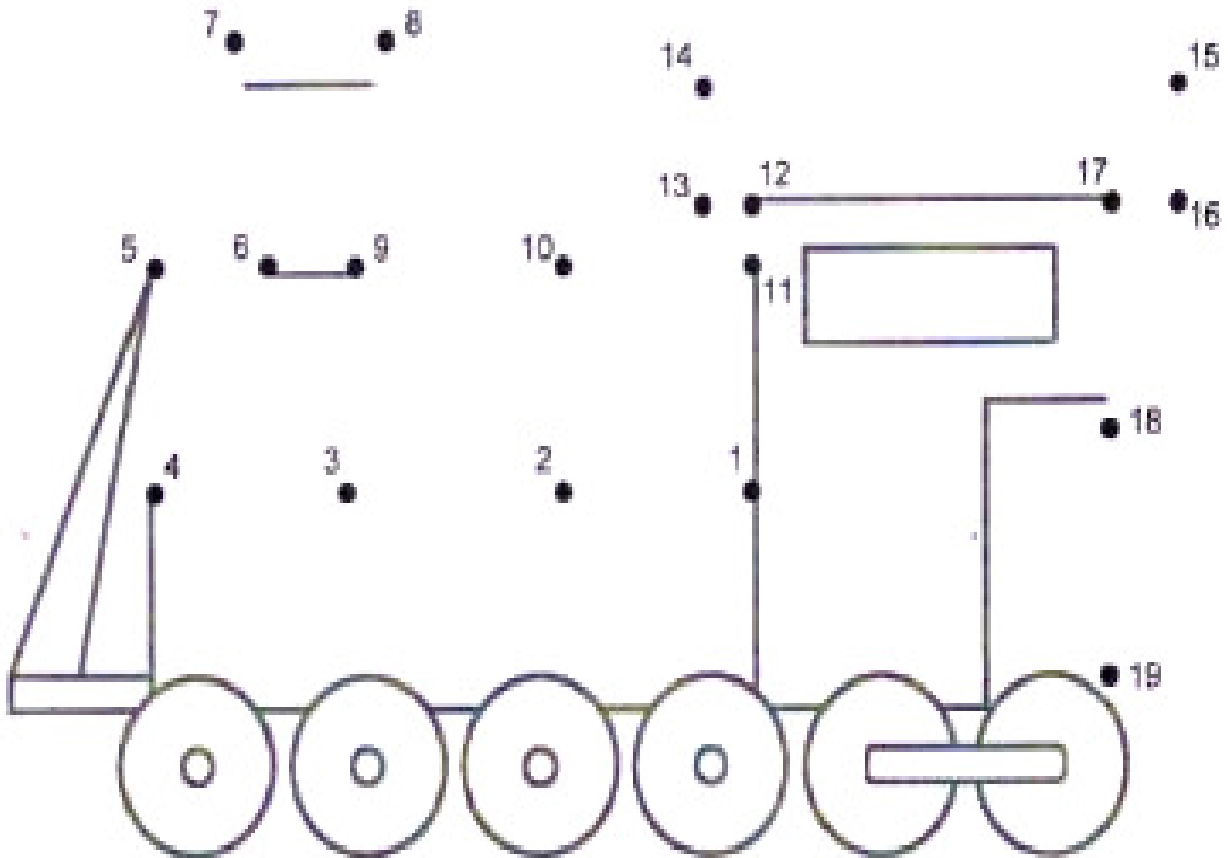


15, 14, 13

Q.9. Write the missing numbers.

\_\_\_\_\_ 9, 10, \_\_\_\_\_, 12, \_\_\_\_\_, \_\_\_\_\_, 15, \_\_\_\_\_, 17, \_\_\_\_\_

Q.10. Join the dots from 1 – 19



Q.11. Write the numbers from 21 to 40


21 \_\_\_\_\_  
\_\_\_\_\_ 40

Q.12 Write the most repeated number in the box.

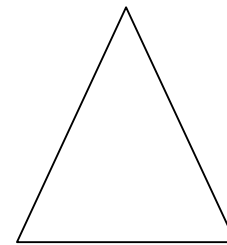
11	13	22	24
13	24	11	22
24	13	22	24
11	24	22	24

--


Q.13 Colour the shapes.



Red



Green



Blue



Orange

Q.14. Tick the tall one and cross out the short one in each sections.



Q.15. Tick the long one.



Q.16. Colour yellow in big and red in small picture

